




Use the number line to solve each problem.

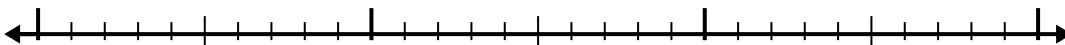
Answers

1) $6.3 + 3.6 =$




1. _____

2) $3.3 + 1.4 =$



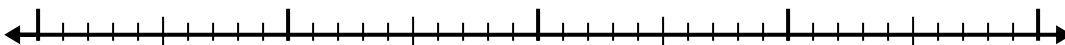
2. _____

3) $3.8 + 2.9 =$




3. _____

4) $5.4 + 2.4 =$




4. _____

5) $4.8 + 3.1 =$



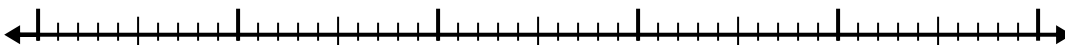
5. _____

6) $8.1 + 1.8 =$



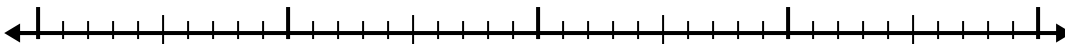
6. _____

7) $6.3 + 3.4 =$




7. _____

8) $1.4 + 2.3 =$



8. _____

9) $5.4 + 2.2 =$



9. _____

10) $7.2 + 1.8 =$

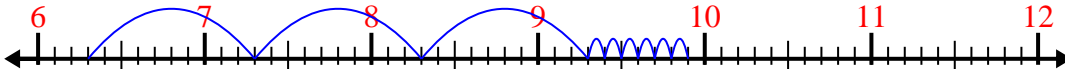


10. _____

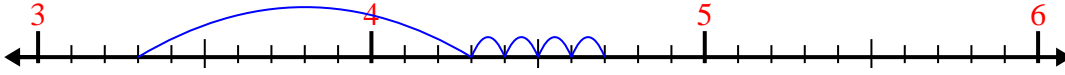


Use the number line to solve each problem.

1) $6.3 + 3.6 =$



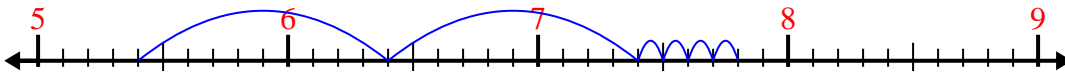
2) $3.3 + 1.4 =$



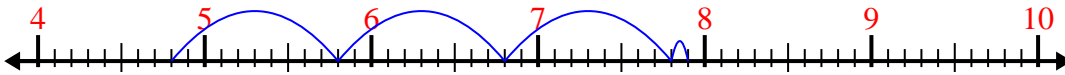
3) $3.8 + 2.9 =$



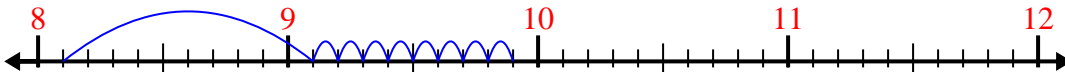
4) $5.4 + 2.4 =$



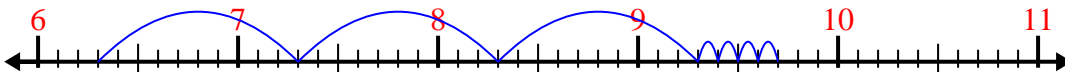
5) $4.8 + 3.1 =$



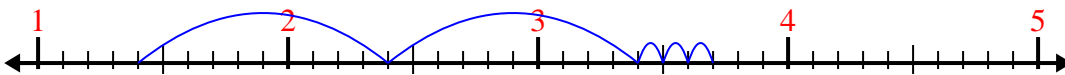
6) $8.1 + 1.8 =$



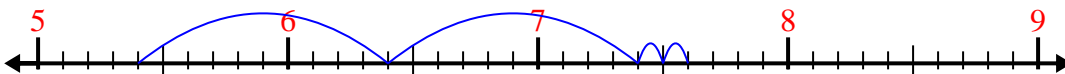
7) $6.3 + 3.4 =$



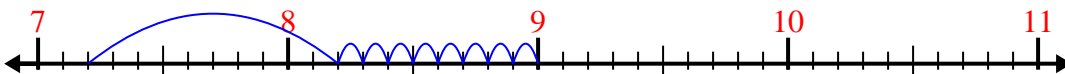
8) $1.4 + 2.3 =$



9) $5.4 + 2.2 =$



10) $7.2 + 1.8 =$



Answers

1. 9.9

2. 4.7

3. 6.7

4. 7.8

5. 7.9

6. 9.9

7. 9.7

8. 3.7

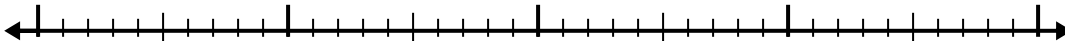
9. 7.6

10. 9.0

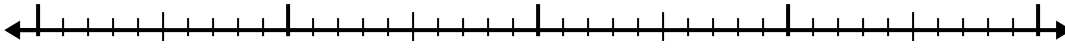


Use the number line to solve each problem.


1) $2.5 + 1.5 =$



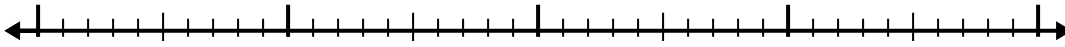
2) $6.9 + 2.5 =$



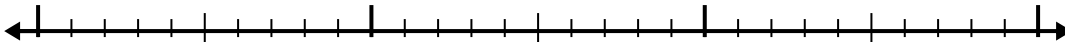
3) $8.6 + 3.1 =$



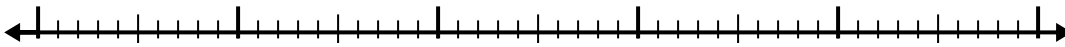
4) $7.9 + 1.4 =$



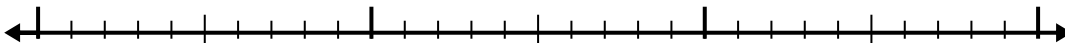
5) $4.4 + 1.1 =$



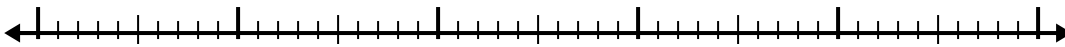
6) $1.2 + 2.2 =$




7) $3.6 + 1.5 =$



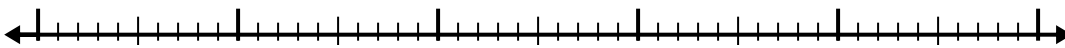
8) $5 + 2.9 =$



9) $5.4 + 3.7 =$



10) $4.8 + 2.2 =$



Answers

1. _____

2. _____

3. _____

4. _____

5. _____

6. _____

7. _____

8. _____

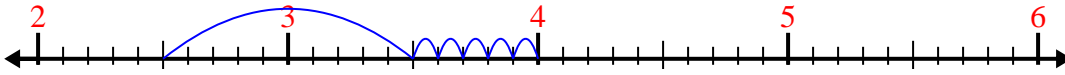
9. _____

10. _____

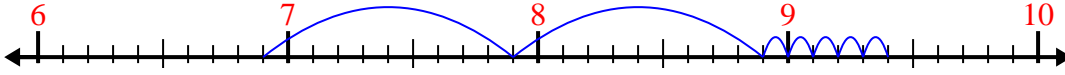


Use the number line to solve each problem.

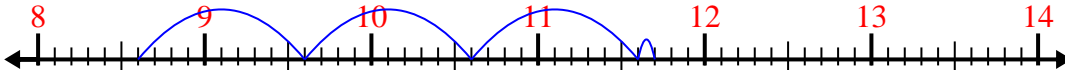
1) $2.5 + 1.5 =$



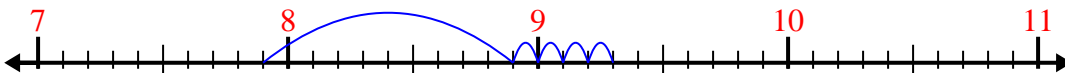
2) $6.9 + 2.5 =$



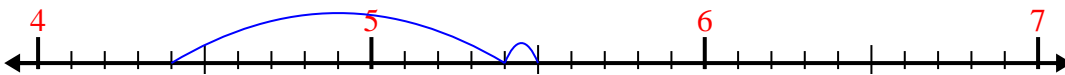
3) $8.6 + 3.1 =$



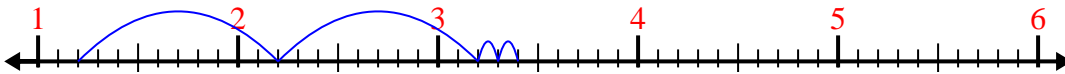
4) $7.9 + 1.4 =$



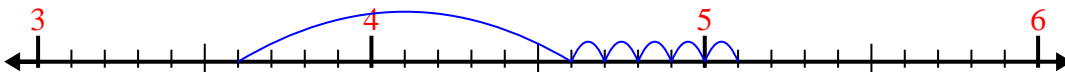
5) $4.4 + 1.1 =$



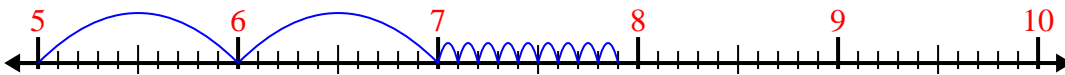
6) $1.2 + 2.2 =$



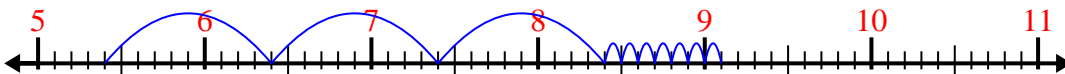
7) $3.6 + 1.5 =$



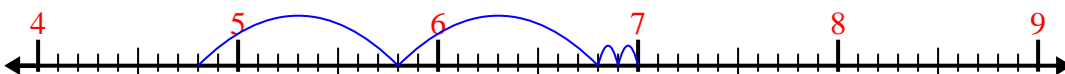
8) $5 + 2.9 =$



9) $5.4 + 3.7 =$



10) $4.8 + 2.2 =$



Answers

1. 4.0

2. 9.4

3. 11.7

4. 9.3

5. 5.5

6. 3.4

7. 5.1

8. 7.9

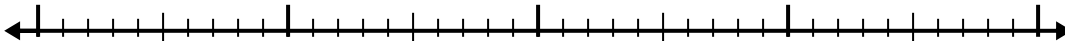
9. 9.1

10. 7.0

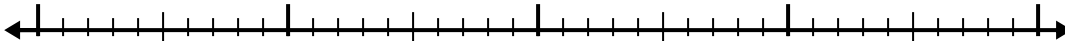


Use the number line to solve each problem.

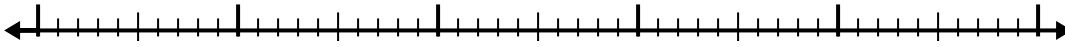
1) $1.5 + 1.7 =$



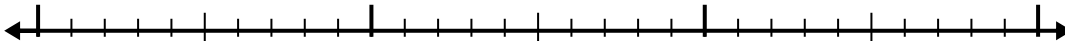
2) $7.6 + 1.7 =$



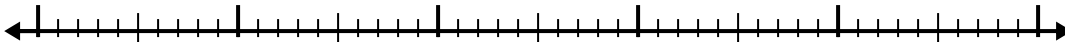
3) $2.7 + 2.6 =$



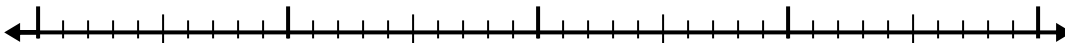
4) $2.1 + 1.6 =$




5) $4.2 + 3.8 =$



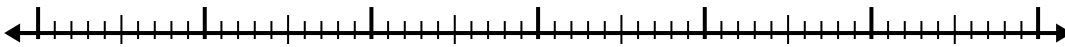
6) $1.1 + 2.5 =$



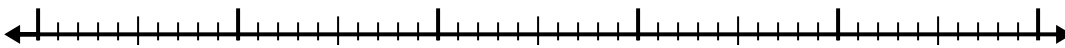
7) $2.6 + 3.5 =$



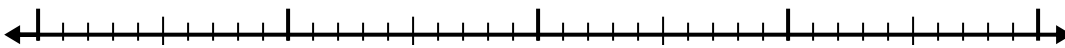
8) $5.2 + 3.7 =$



9) $5 + 2.6 =$



10) $4.3 + 1.2 =$



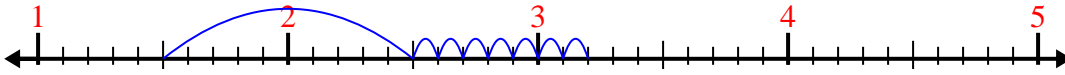
Answers

1. _____
2. _____
3. _____
4. _____
5. _____
6. _____
7. _____
8. _____
9. _____
10. _____

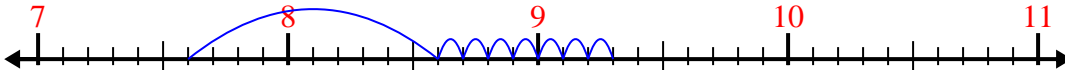


Use the number line to solve each problem.

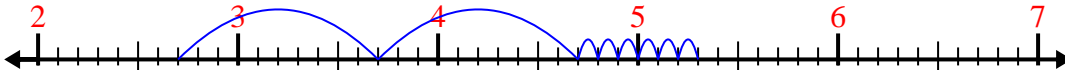
1) $1.5 + 1.7 =$



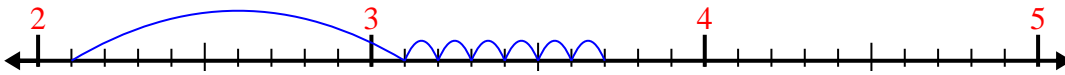
2) $7.6 + 1.7 =$



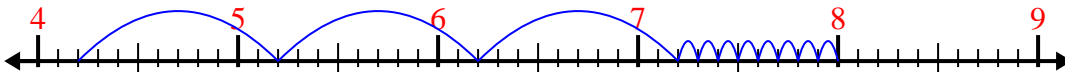
3) $2.7 + 2.6 =$



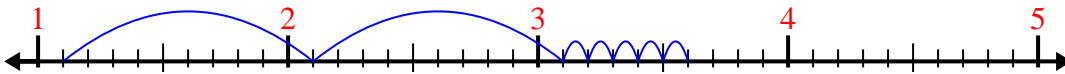
4) $2.1 + 1.6 =$



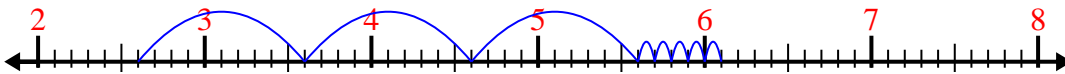
5) $4.2 + 3.8 =$



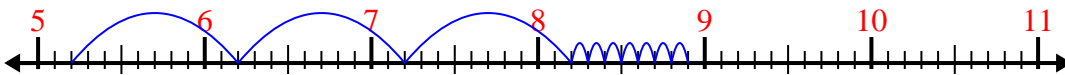
6) $1.1 + 2.5 =$



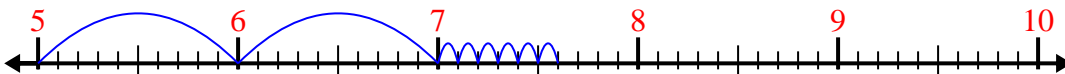
7) $2.6 + 3.5 =$



8) $5.2 + 3.7 =$



9) $5 + 2.6 =$



10) $4.3 + 1.2 =$



Answers

1. 3.2

2. 9.3

3. 5.3

4. 3.7

5. 8.0

6. 3.6

7. 6.1

8. 8.9

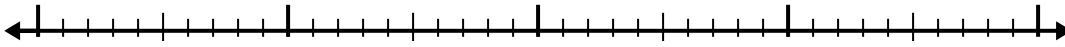
9. 7.6

10. 5.5




Use the number line to solve each problem.

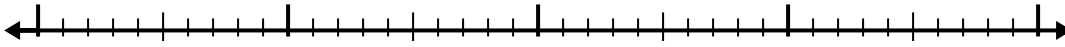
1) $8 + 2.3 =$



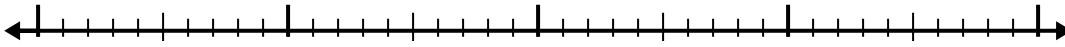
2) $2.1 + 3.6 =$



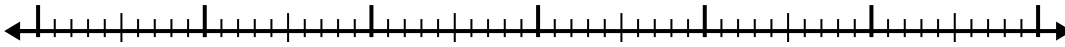
3) $5.8 + 1.3 =$




4) $4.9 + 1.8 =$



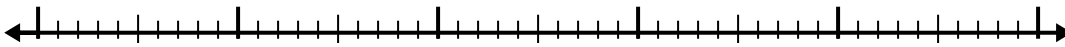
5) $4.9 + 3.3 =$



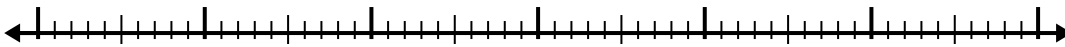
6) $8.8 + 3.4 =$



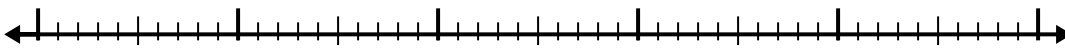
7) $2 + 2.9 =$



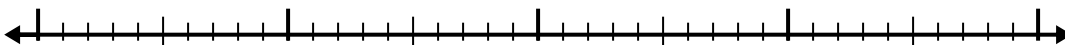
8) $7.8 + 3.4 =$



9) $4.8 + 2.4 =$



10) $6.3 + 2.8 =$



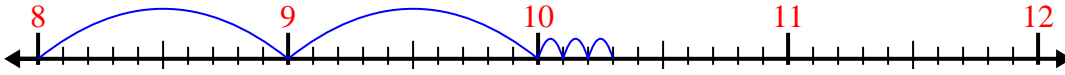
Answers

1. _____
2. _____
3. _____
4. _____
5. _____
6. _____
7. _____
8. _____
9. _____
10. _____

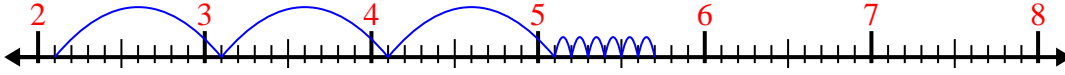


Use the number line to solve each problem.

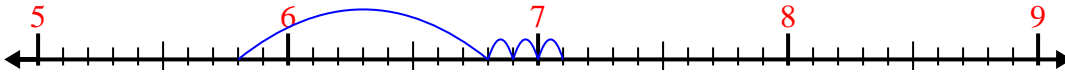
1) $8 + 2.3 =$



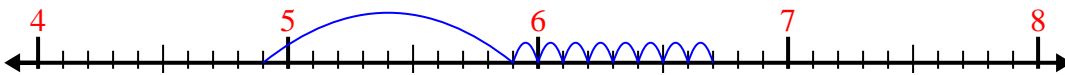
2) $2.1 + 3.6 =$



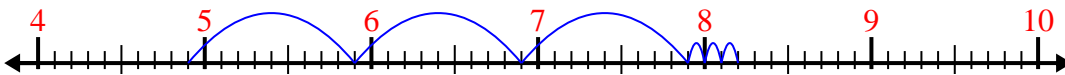
3) $5.8 + 1.3 =$



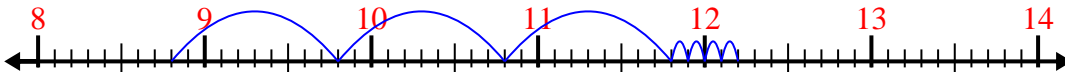
4) $4.9 + 1.8 =$



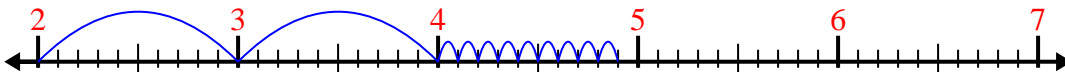
5) $4.9 + 3.3 =$



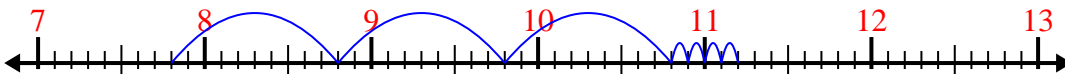
6) $8.8 + 3.4 =$




7) $2 + 2.9 =$



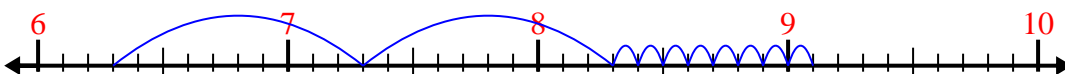
8) $7.8 + 3.4 =$



9) $4.8 + 2.4 =$



10) $6.3 + 2.8 =$



Answers

1. 10.3

2. 5.7

3. 7.1

4. 6.7

5. 8.2

6. 12.2

7. 4.9

8. 11.2

9. 7.2

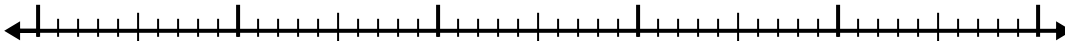
10. 9.1



Use the number line to solve each problem.

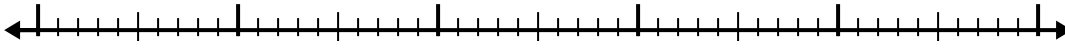
Answers

1) $5.8 + 3.7 =$



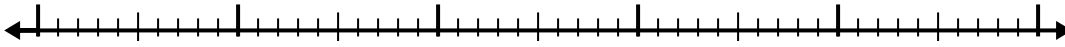
1. _____

2) $8.2 + 2.1 =$



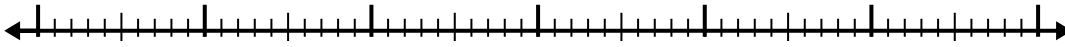
2. _____

3) $8.6 + 3.9 =$



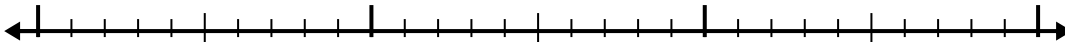
3. _____

4) $3 + 3.6 =$



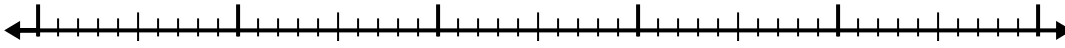
4. _____

5) $1.3 + 1.1 =$



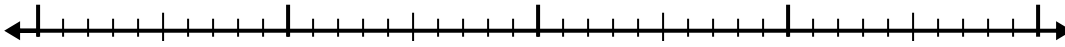
5. _____

6) $4 + 2.7 =$



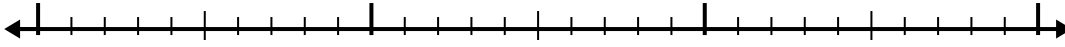
6. _____

7) $8.5 + 1.7 =$



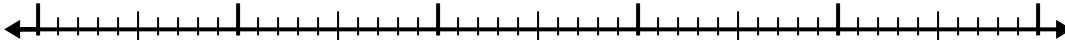
7. _____

8) $1.6 + 1.6 =$



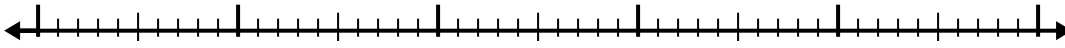
8. _____

9) $6.8 + 2.8 =$



9. _____

10) $7.7 + 3.7 =$

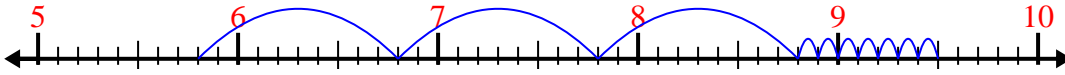


10. _____

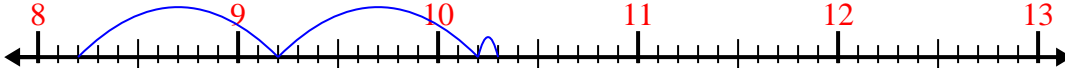


Use the number line to solve each problem.

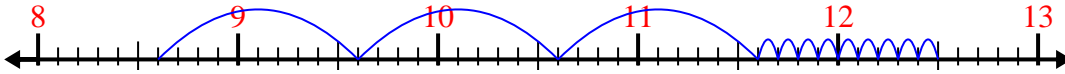
1) $5.8 + 3.7 =$



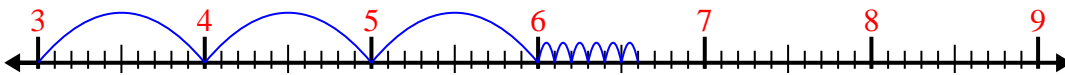
2) $8.2 + 2.1 =$



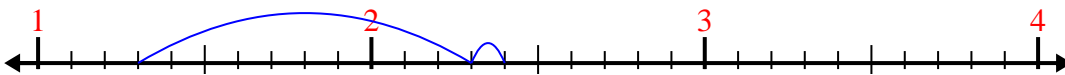
3) $8.6 + 3.9 =$



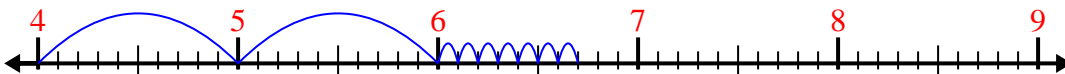
4) $3 + 3.6 =$



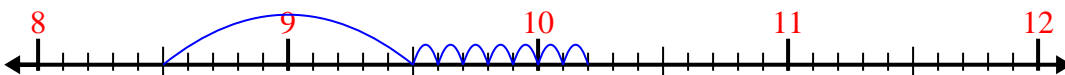
5) $1.3 + 1.1 =$




6) $4 + 2.7 =$



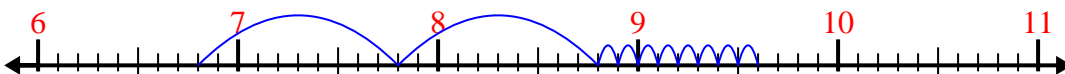
7) $8.5 + 1.7 =$



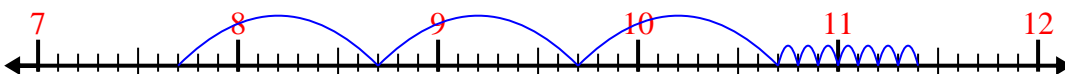
8) $1.6 + 1.6 =$



9) $6.8 + 2.8 =$



10) $7.7 + 3.7 =$



Answers

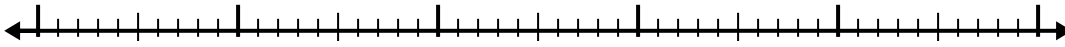
1. 9.5
2. 10.3
3. 12.5
4. 6.6
5. 2.4
6. 6.7
7. 10.2
8. 3.2
9. 9.6
10. 11.4



Use the number line to solve each problem.

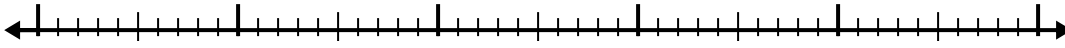
Answers

1) $6.7 + 2.9 =$



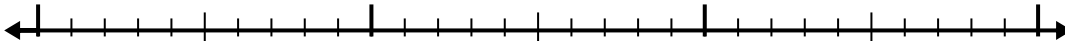
1. _____

2) $5.7 + 3.8 =$



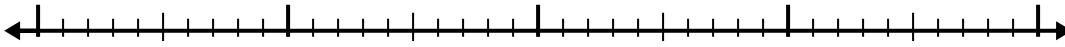
2. _____

3) $8.9 + 1.3 =$



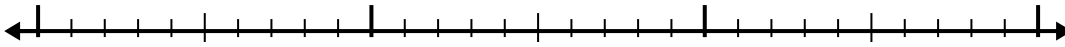
3. _____

4) $5 + 1.9 =$



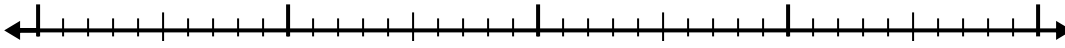
4. _____

5) $1.1 + 1.9 =$



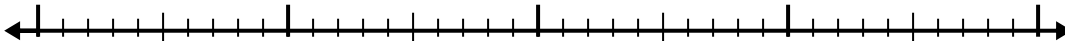
5. _____

6) $2.3 + 1.2 =$



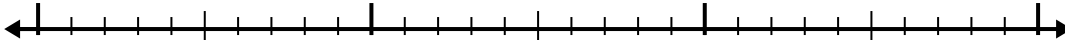
6. _____

7) $3.8 + 1.6 =$



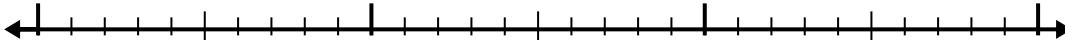
7. _____

8) $8.3 + 1.2 =$



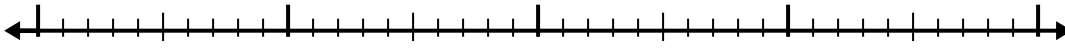
8. _____

9) $3.5 + 1.9 =$



9. _____

10) $5.1 + 1.6 =$

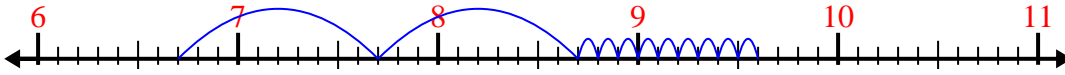


10. _____

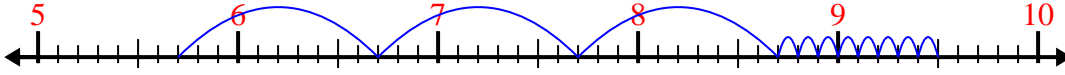


Use the number line to solve each problem.

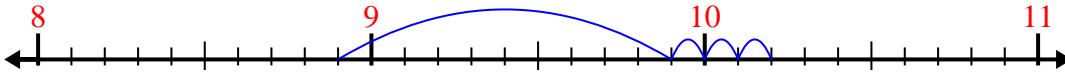
1) $6.7 + 2.9 =$



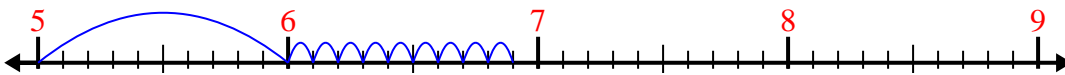
2) $5.7 + 3.8 =$



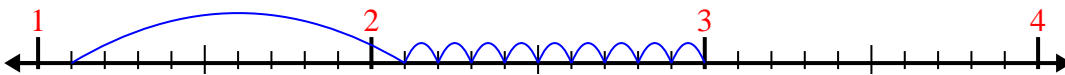
3) $8.9 + 1.3 =$



4) $5 + 1.9 =$



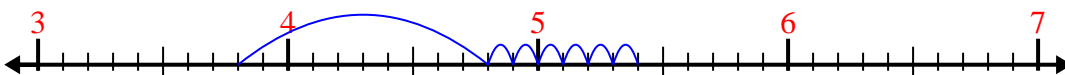
5) $1.1 + 1.9 =$



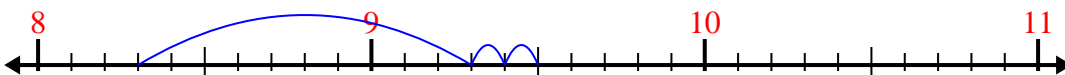
6) $2.3 + 1.2 =$



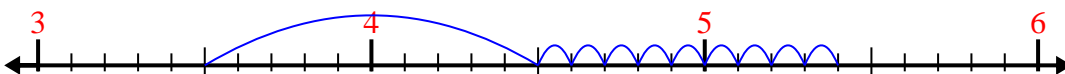
7) $3.8 + 1.6 =$



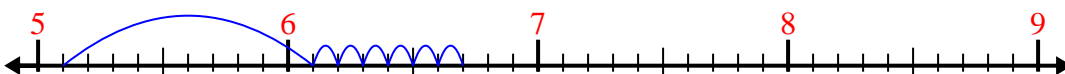
8) $8.3 + 1.2 =$



9) $3.5 + 1.9 =$



10) $5.1 + 1.6 =$



Answers

1. 9.6

2. 9.5

3. 10.2

4. 6.9

5. 3.0

6. 3.5

7. 5.4

8. 9.5

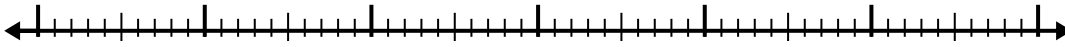
9. 5.4

10. 6.7

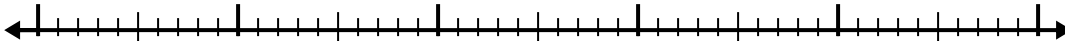


Use the number line to solve each problem.


1) $1.4 + 3.7 =$



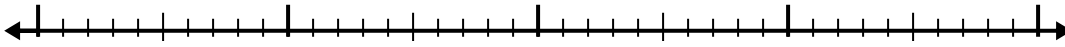
2) $7.2 + 2.6 =$



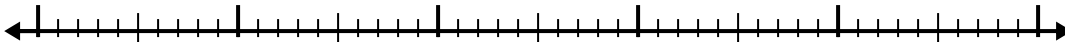
3) $4.4 + 3.1 =$



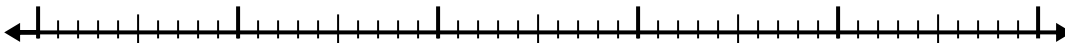
4) $8.9 + 1.5 =$



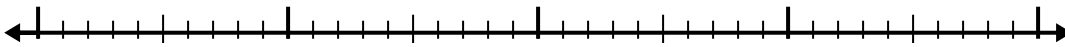
5) $2.2 + 2.7 =$



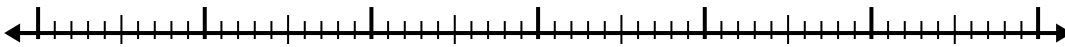
6) $8.6 + 2.6 =$



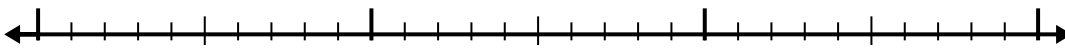
7) $1.8 + 1.3 =$



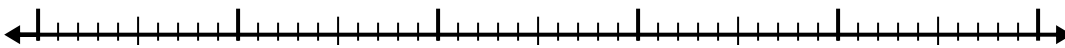
8) $4.7 + 3.8 =$



9) $8.7 + 1.2 =$



10) $7.4 + 3.3 =$



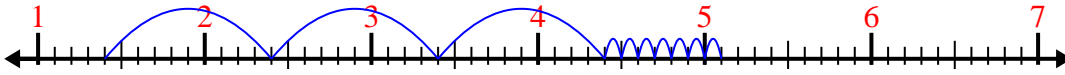
Answers

1. _____
2. _____
3. _____
4. _____
5. _____
6. _____
7. _____
8. _____
9. _____
10. _____

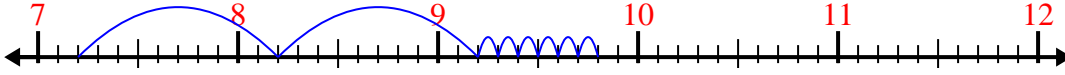


Use the number line to solve each problem.

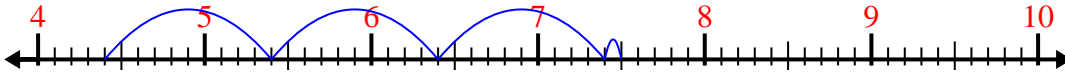
1) $1.4 + 3.7 =$



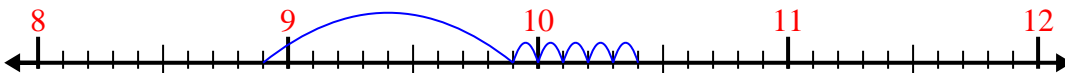
2) $7.2 + 2.6 =$



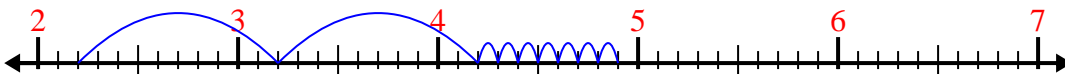
3) $4.4 + 3.1 =$



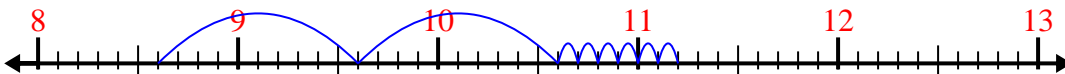
4) $8.9 + 1.5 =$



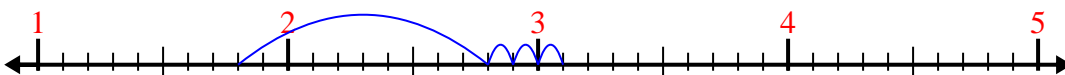
5) $2.2 + 2.7 =$



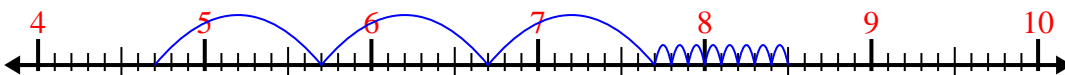
6) $8.6 + 2.6 =$



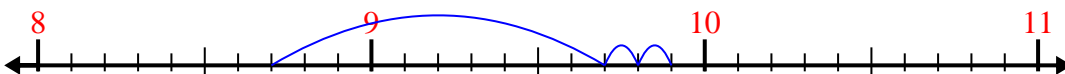
7) $1.8 + 1.3 =$



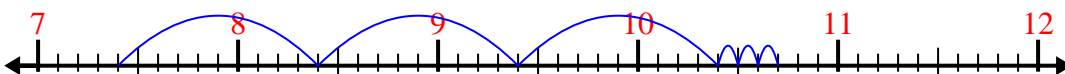
8) $4.7 + 3.8 =$



9) $8.7 + 1.2 =$



10) $7.4 + 3.3 =$



Answers

1. 5.1

2. 9.8

3. 7.5

4. 10.4

5. 4.9

6. 11.2

7. 3.1

8. 8.5

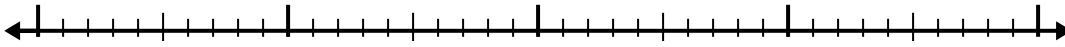
9. 9.9

10. 10.7

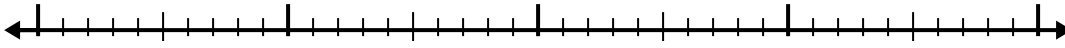


Use the number line to solve each problem.

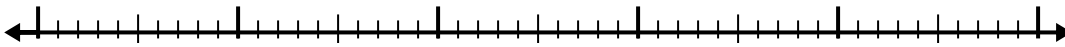
1) $5.7 + 2.7 =$



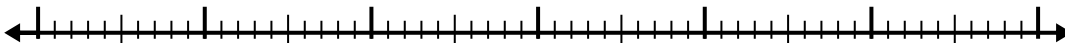
2) $5.6 + 2.1 =$



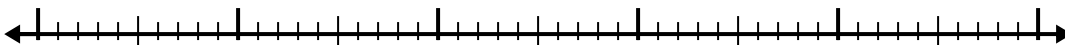
3) $2 + 3.1 =$



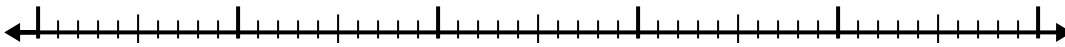
4) $2.2 + 3.1 =$



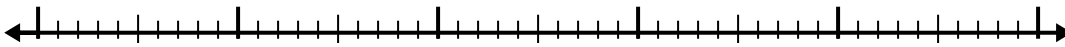
5) $3.1 + 2.2 =$



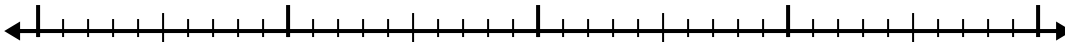
6) $5.7 + 2.6 =$



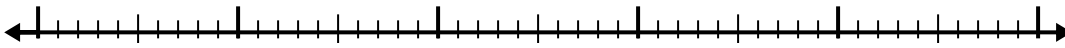
7) $8.1 + 2.5 =$



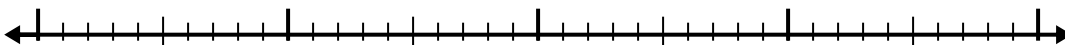
8) $2.4 + 1.3 =$



9) $3.3 + 2.4 =$



10) $3.3 + 1.5 =$



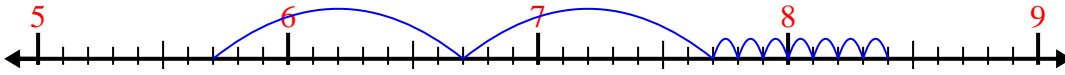
Answers

1. _____
2. _____
3. _____
4. _____
5. _____
6. _____
7. _____
8. _____
9. _____
10. _____

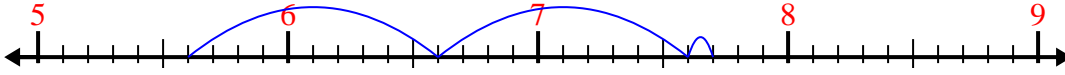


Use the number line to solve each problem.

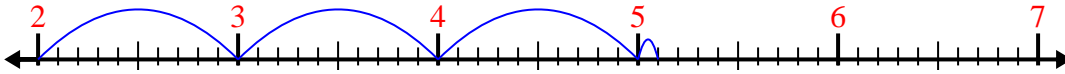
1) $5.7 + 2.7 =$



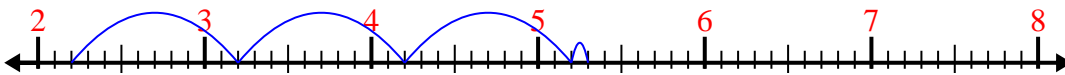
2) $5.6 + 2.1 =$



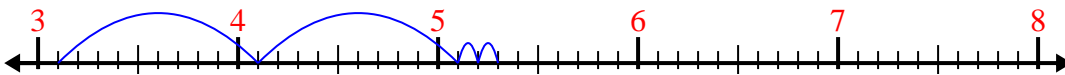
3) $2 + 3.1 =$



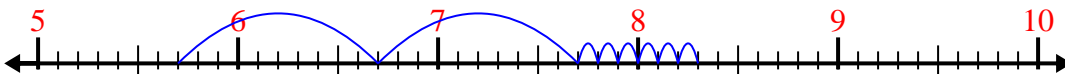
4) $2.2 + 3.1 =$



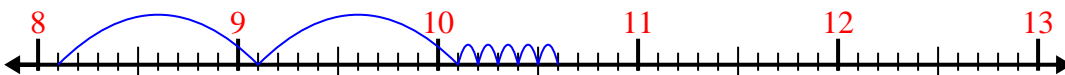
5) $3.1 + 2.2 =$



6) $5.7 + 2.6 =$



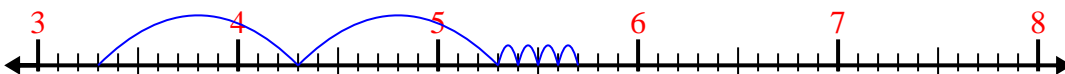
7) $8.1 + 2.5 =$



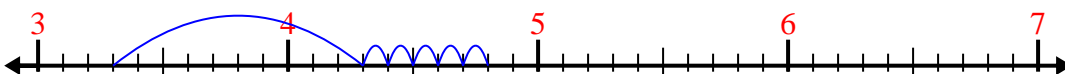
8) $2.4 + 1.3 =$



9) $3.3 + 2.4 =$



10) $3.3 + 1.5 =$



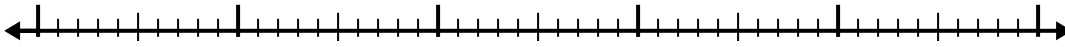
Answers

1. 8.4
2. 7.7
3. 5.1
4. 5.3
5. 5.3
6. 8.3
7. 10.6
8. 3.7
9. 5.7
10. 4.8

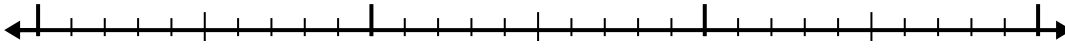


Use the number line to solve each problem.

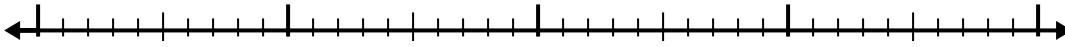
1) $7.2 + 2.7 =$



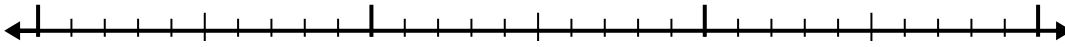
2) $4.6 + 1.2 =$



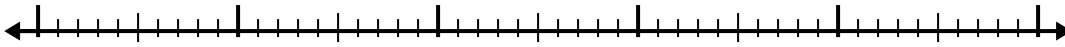
3) $8.3 + 2.9 =$



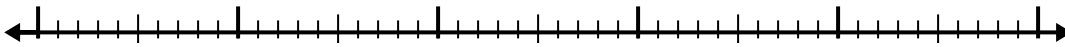
4) $8.9 + 1.3 =$




5) $1.7 + 2.9 =$



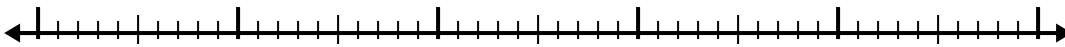
6) $6.2 + 2.1 =$




7) $5.6 + 3.9 =$



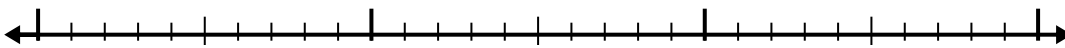
8) $7.3 + 2.3 =$



9) $2 + 3.4 =$



10) $6.5 + 1.1 =$



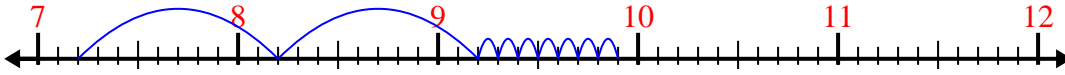
Answers

1. _____
2. _____
3. _____
4. _____
5. _____
6. _____
7. _____
8. _____
9. _____
10. _____

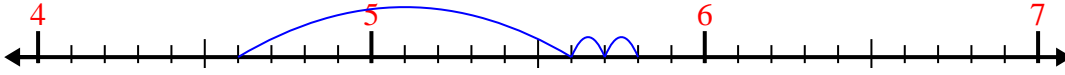


Use the number line to solve each problem.

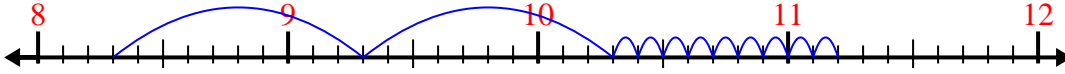
1) $7.2 + 2.7 =$



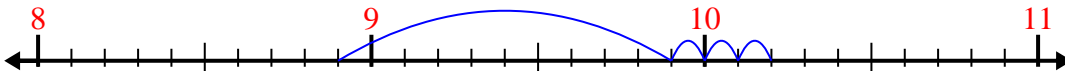
2) $4.6 + 1.2 =$



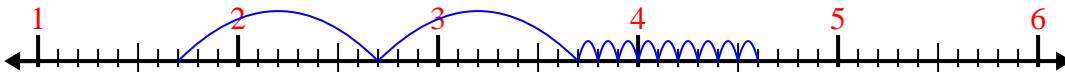
3) $8.3 + 2.9 =$



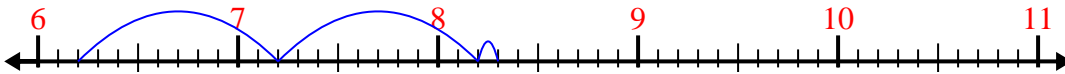
4) $8.9 + 1.3 =$



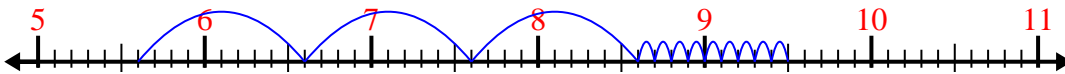
5) $1.7 + 2.9 =$



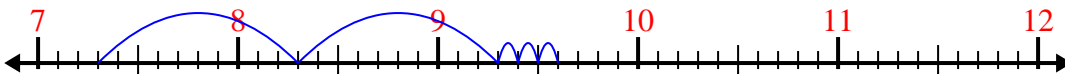
6) $6.2 + 2.1 =$



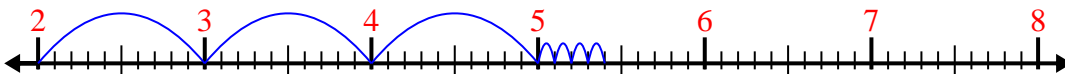
7) $5.6 + 3.9 =$



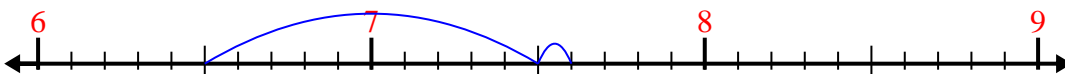
8) $7.3 + 2.3 =$



9) $2 + 3.4 =$



10) $6.5 + 1.1 =$



Answers

1. 9.9

2. 5.8

3. 11.2

4. 10.2

5. 4.6

6. 8.3

7. 9.5

8. 9.6

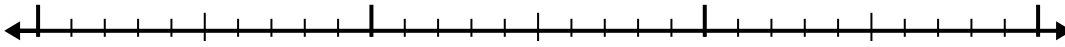
9. 5.4

10. 7.6

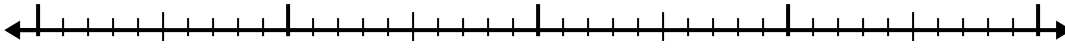


Use the number line to solve each problem.


1) $5.8 + 1.4 =$



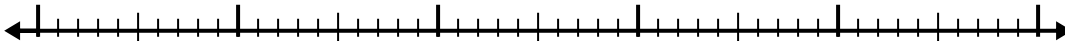
2) $2.9 + 1.5 =$



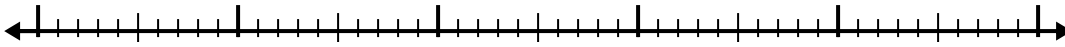
3) $3 + 3.5 =$




4) $2.5 + 2.9 =$



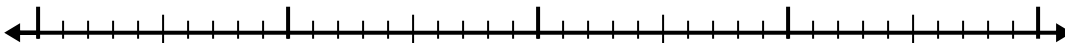
5) $2.8 + 2.8 =$



6) $1.9 + 3.6 =$



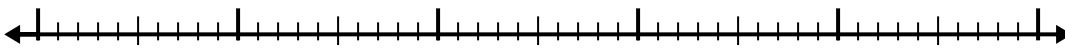
7) $7.9 + 1.6 =$



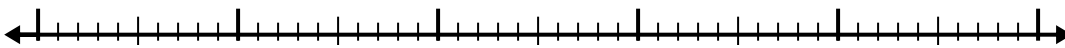
8) $3.1 + 2.7 =$



9) $3.4 + 3.9 =$



10) $6.8 + 2.5 =$



Answers

1. _____

2. _____

3. _____

4. _____

5. _____

6. _____

7. _____

8. _____

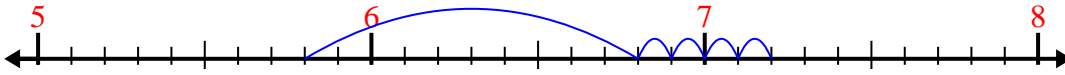
9. _____

10. _____

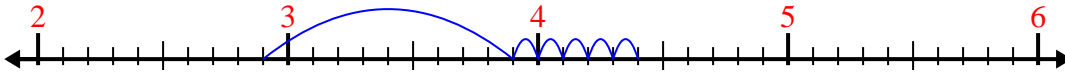


Use the number line to solve each problem.

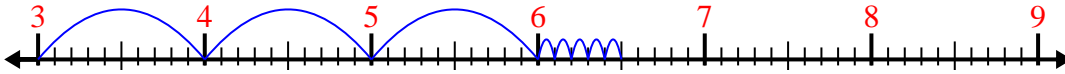
1) $5.8 + 1.4 =$



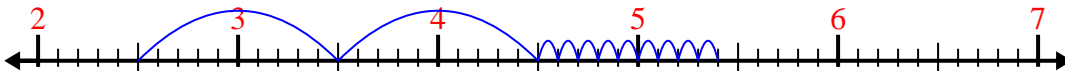
2) $2.9 + 1.5 =$



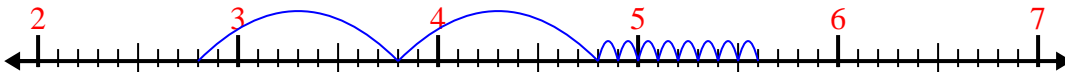
3) $3 + 3.5 =$



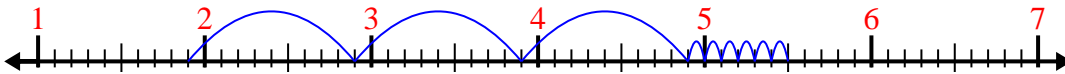
4) $2.5 + 2.9 =$



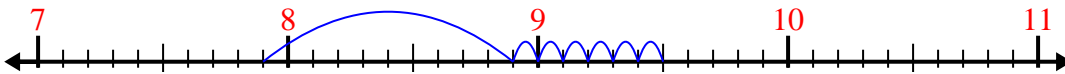
5) $2.8 + 2.8 =$



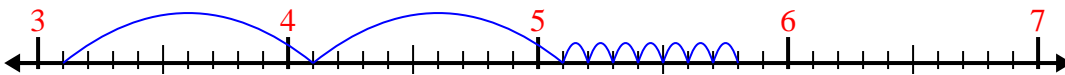
6) $1.9 + 3.6 =$



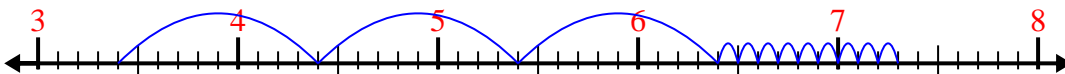
7) $7.9 + 1.6 =$



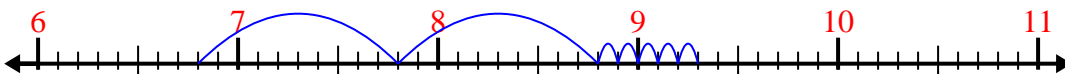
8) $3.1 + 2.7 =$



9) $3.4 + 3.9 =$



10) $6.8 + 2.5 =$



Answers

1. 7.2

2. 4.4

3. 6.5

4. 5.4

5. 5.6

6. 5.5

7. 9.5

8. 5.8

9. 7.3

10. 9.3